


Foundational Numeracy

-12°C

Module 6: Integers, including Fractions and Decimals

Pre-Tests, Final Module Quiz, and
Answer Key

Developed for Alberta's Community Adult Learning Program**Funded by Alberta Advanced Education**

Copyright © 2018, NorQuest College and its licensors



Cover image: © Getty Images

This resource may be reprinted for educational or non-commercial purposes without additional copyright permission provided that attribution is given to NorQuest College.

Permission to reproduce this resource for commercial purposes must be obtained in writing from NorQuest College.

NorQuest College has made every effort to obtain copyright permission for the materials and images used herein. Please bring any omissions to our attention at the following address:

NorQuest College
10215 108 Street NW,
Edmonton AB, T5J 1L6
Attn: Curriculum Development

Unit 1 Pre-Test

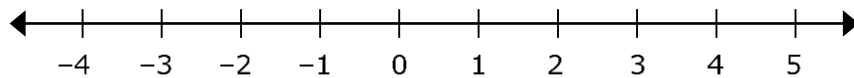
Name: _____

1. Write the following using positive and negative integers:

- a. A loss of \$400 _____
- b. 200 feet above sea level _____
- c. 50 feet below sea level _____

2. Circle the correct spot where each number belongs.

- a. -3 b. +4 c. 0



3. Write $<$ or $>$ between each pair of numbers to make a true statement.

- a. -3 -7
- b. -4 2
- c. -5 -3
- d. 13 15

4. Write the absolute value of each of the following.

- a. $|-4|$ _____
- b. $|21|$ _____

5. Put the following integers in order from largest to smallest.

- 3, 8, -7, 6 _____

Unit 2 Pre-Test

Name: _____

Solve the following equations.

1. $(+8) + (-6) =$

2. $(-9) + (-4) =$

3. $(-7) + (+4) =$

4. $-7 + (+10) + (-14) + (+2) =$

5. $(+7) - (+10) =$

6. $(-5) - (+3) =$

7. $(+3) - (-10) =$

8. $(-8) - (-12) =$

-
9. On December 4 at 9 a.m., the temperature was -18°C . By 1 p.m., the temperature had risen by 5°C . What was the temperature at 1 p.m.?
10. On Monday, Jim had \$75 in his bank account. He deposited \$163 and paid bills of \$48 and \$116. How much money is left in his bank account?

Unit 3 Pre-Test

Name: _____

Solve the following equations. Round to the thousandths place as necessary.

1. $(-6) \times 4 =$

2. $(+5)(-9) =$

3. $(-4)(-3) =$

4. $(-2)(-6)(-5) =$

5. $(-2)^3 =$

6. $\sqrt{16} =$

7. $-12 \div (-4) =$

8. $50 \div (-5) =$

9. $(-20) \div 4 =$

10. $2 + (-3) \times 3^2 =$

Unit 4 Pre-Test

Name: _____

Solve the following equations.

1. $(-5.2) - 1.83 =$

2. $(-3.06) + (12.34) =$

3. $0.7 - 6.5 =$

4. $(+8.3) - (-5.62) - (+7.81) =$

5. $6.5 \times (-0.4) =$

6. $(-0.7) \times (-0.5) =$

7. $(-3.2) \div 0.04 =$

8. $(-5) \div (-20) =$

9. $(-1.9 + 2.5) + 3(0.9) =$

10. $-5.3(-2) - (-0.08) \div 4 =$

Unit 5 Pre-Test

Name: _____

Solve the following numerical expressions.

1. $\left(-\frac{3}{8}\right) + \frac{5}{6} =$

2. $7\frac{3}{4} + \left(-9\frac{5}{12}\right) =$

3. $\left(-\frac{9}{14}\right) + \left(-\frac{6}{7}\right) =$

4. $\left(-\frac{3}{3}\right) - \left(-\frac{1}{5}\right) =$

5. $2\frac{2}{3} - 7\frac{1}{6} =$

$$6. \left(-\frac{28}{35}\right)\left(\frac{5}{7}\right) =$$

$$7. -\frac{11}{15} \div \left(-\frac{22}{45}\right) =$$

$$8. 3\frac{1}{2} \div (-14) =$$

$$9. \left(\frac{5}{6} - \frac{1}{4}\right) \div \left(-\frac{21}{4}\right) =$$

$$10. \frac{5 + 4^2 - (-6)}{7 - 5 - 11} =$$

Module 6: Final Module Quiz

Name: _____

1. Write $<$ or $>$ between each pair of numbers to make a true statement.

(Remember that $>$ means **greater than** and $<$ means **less than**.)

a. 0 _____ 2

c. 1 _____ -4

b. -4 _____ -2

d. -7 _____ -2

2. Arrange the integers in order from smallest to largest.

$$-\sqrt{9}, 2.6, 0, -\frac{7}{4}, -2.3$$

3. Solve the following numerical expressions.

a. $7 + (-8) =$

b. $2 + (-6) =$

c. $(-8) - (-3) =$

d. $(-4) \times 9 =$

e. $(-7)(-4)(-2) =$

f. $72 \div (-8) =$

g. $\frac{6 \times (-6)}{-9} =$

h. $9 + 2 \times 42 \div 6 - 2 =$

i. $(18 \div 6) + 5 + (12 - 3) \times 8 =$

j. $(10 - 2) \times 8 + 5 + 15 - 5 =$

k. $-6\frac{1}{2} + 3\frac{2}{5} - 5\frac{7}{10} =$

l. $\frac{6 + 3^2 - (-7)}{-7 - 9 + 5} =$

4. A football team has to gain at least 10 yards during four plays in order to keep the ball. Suppose that on four plays, a team lost 6 yards, gained 8 yards, lost 2 yards, and gained 7 yards. What was the net yards gained or lost after the four plays? Did the team gain enough to keep the ball?

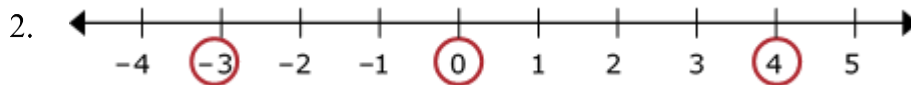
5. John started November with \$275.75 in his bank account. He deposited three cheques, each worth \$486.75, and wrote cheques for \$13.62, \$183.99, and \$45.55. How much was in his account at the end of the month?

6. The temperature at 8 a.m. was -7°C . The temperature went up 3°C at 10 a.m. and another 5°C by 3 p.m. By 9 p.m., the temperature had dropped -14°C . What was the temperature at 9 p.m.?

Answer Key

Unit 1 Pre-Test

1. a. $-\$400$ b. $+200$ feet c. -50 feet



3. a. $>$ b. $<$ c. $<$ d. $<$

4. a. 4 b. 21

5. 8, 6, -3 , -7

Unit 2 Pre-Test

1. $+2$ or 2 2. -13 3. -3 4. -9 5. -3

6. -8 7. $+13$ or 13 8. $+4$ or 4

9. The temperature was -13°C at 1 p.m.

10. Jim has $\$74$ left in his bank account.

Unit 3 Pre-Test

1. -24 2. -45 3. 12 4. -60 5. -8

6. 4 7. 3 8. -10 9. -5 10. -25

Unit 4 Pre-Test

1. -7.03 2. 9.28 3. -5.8 4. 6.11 5. -2.6

6. 0.35 7. -80 8. 0.25 9. 3.3 10. 10.62

Unit 5 Pre-Test

1. $\frac{11}{24}$
2. $-1\frac{2}{3}$
3. $-1\frac{1}{2}$
4. $-\frac{4}{5}$
5. $-4\frac{1}{2}$
6. $-\frac{4}{7}$
7. $1\frac{1}{2}$
8. $-\frac{1}{4}$
9. $-\frac{1}{9}$
10. -3

Final Module Quiz

1. a. $<$ b. $>$ c. $<$ d. $<$
2. $-\sqrt{9}, -2.3, -\frac{7}{4}, 0, 2.6$
3. a. -1 b. -4 c. -5 d. -36
e. -56 f. -9 g. 4 h. 21
i. 80 j. 79 k. $-8\frac{4}{5}$ l. -2
4. The team gained 7 yards. No, they did not gain enough yards to keep the ball.
5. He had \$1 492.84 in his account at the end of the month.
6. The temperature at 9 p.m. was -13°C .